

Figure TF11-1: Linear variable differential transformer (LVDT) circuit.

5. MAGNETOSTATICS

Chapter 5 Overview

Chapter Contents

- Overview, 236
- 5-1** Magnetic Forces and Torques, 237
- 5-2** The Biot–Savart Law, 244
- 5-3** Maxwell’s Magnetostatic Equations, 251
- TB10** Electromagnets, 256
- 5-4** Vector Magnetic Potential, 259
- 5-5** Magnetic Properties of Materials, 260
- 5-6** Magnetic Boundary Conditions, 264
- 5-7** Inductance, 265
- TB11** Inductive Sensors, 268
- 5-8** Magnetic Energy, 271
- Chapter 5 Summary, 272
- Problems, 274

Objectives

Upon learning the material presented in this chapter, you should be able to:

1. Calculate the magnetic force on a current-carrying wire placed in a magnetic field and the torque exerted on a current loop.
2. Apply the Biot–Savart law to calculate the magnetic field due to current distributions.
3. Apply Ampère’s law to configurations with appropriate symmetry.
4. Explain magnetic hysteresis in ferromagnetic materials.
5. Calculate the inductance of a solenoid, a coaxial transmission line, or other configurations.
6. Relate the magnetic energy stored in a region to the magnetic field distribution in that region.

Electric vs Magnetic Comparison

Table 5-1: Attributes of electrostatics and magnetostatics.

Attribute	Electrostatics	Magnetostatics
Sources	Stationary charges ρ_v	Steady currents \mathbf{J}
Fields and Fluxes	\mathbf{E} and \mathbf{D}	\mathbf{H} and \mathbf{B}
Constitutive parameter(s)	ϵ and σ	μ
Governing equations		
• Differential form	$\nabla \cdot \mathbf{D} = \rho_v$ $\nabla \times \mathbf{E} = 0$	$\nabla \cdot \mathbf{B} = 0$ $\nabla \times \mathbf{H} = \mathbf{J}$
• Integral form	$\oint_S \mathbf{D} \cdot d\mathbf{s} = Q$ $\oint_C \mathbf{E} \cdot d\mathbf{l} = 0$	$\oint_S \mathbf{B} \cdot d\mathbf{s} = 0$ $\oint_C \mathbf{H} \cdot d\mathbf{l} = I$
Potential	Scalar V , with $\mathbf{E} = -\nabla V$	Vector \mathbf{A} , with $\mathbf{B} = \nabla \times \mathbf{A}$
Energy density	$w_e = \frac{1}{2}\epsilon E^2$	$w_m = \frac{1}{2}\mu H^2$
Force on charge q	$\mathbf{F}_e = q\mathbf{E}$	$\mathbf{F}_m = q\mathbf{u} \times \mathbf{B}$
Circuit element(s)	C and R	L

Electric & Magnetic Forces

Magnetic force

$$\mathbf{F}_m = q\mathbf{u} \times \mathbf{B} \quad (\text{N})$$

Electromagnetic (Lorentz) force

$$\mathbf{F} = \mathbf{F}_e + \mathbf{F}_m = q\mathbf{E} + q\mathbf{u} \times \mathbf{B} = q(\mathbf{E} + \mathbf{u} \times \mathbf{B}).$$

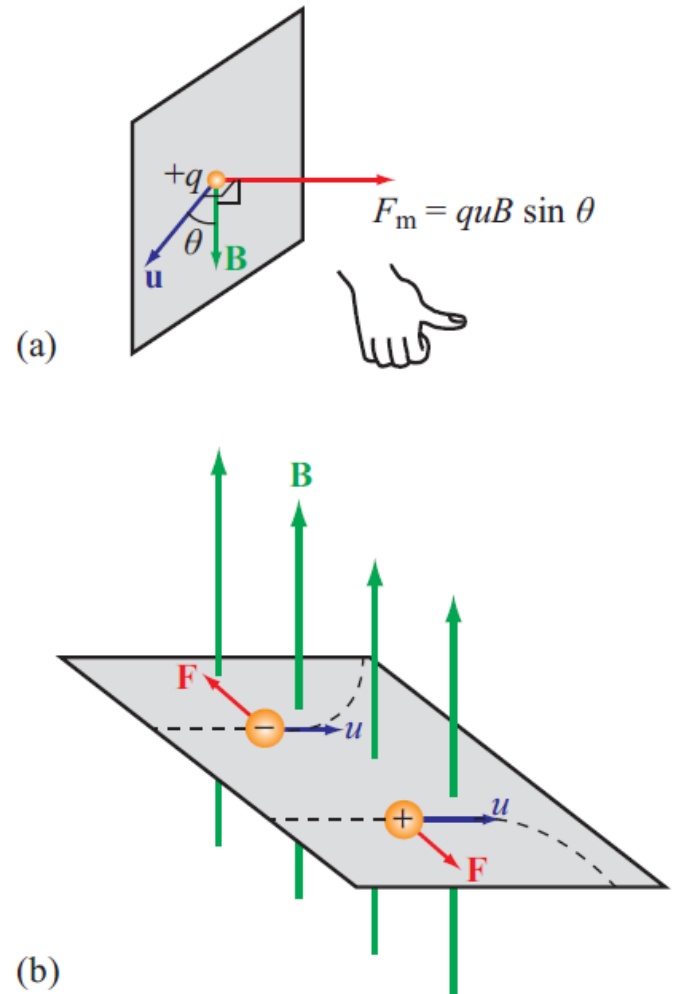


Figure 5-1: The direction of the magnetic force exerted on a charged particle moving in a magnetic field is (a) perpendicular to both \mathbf{B} and \mathbf{u} and (b) depends on the charge polarity (positive or negative).

Magnetic Force on a Current Element

Differential force $d\mathbf{F}_m$ on a differential current $I d\mathbf{l}$:

$$d\mathbf{F}_m = I d\mathbf{l} \times \mathbf{B} \quad (\text{N}). \quad (5.9)$$

For a closed circuit of contour C carrying a current I , the total magnetic force is

$$\mathbf{F}_m = I \oint_C d\mathbf{l} \times \mathbf{B} \quad (\text{N}). \quad (5.10)$$

If the closed wire shown in Fig. 5-3(a) resides in a uniform external magnetic field \mathbf{B} , then \mathbf{B} can be taken outside the integral in Eq. (5.10), in which case

$$\mathbf{F}_m = I \left(\oint_C d\mathbf{l} \right) \times \mathbf{B} = 0. \quad (5.11)$$

This result, which is a consequence of the fact that the vector sum of the infinitesimal vectors $d\mathbf{l}$ over a closed path equals zero, states that the total magnetic force on any closed current loop in a uniform magnetic field is zero.

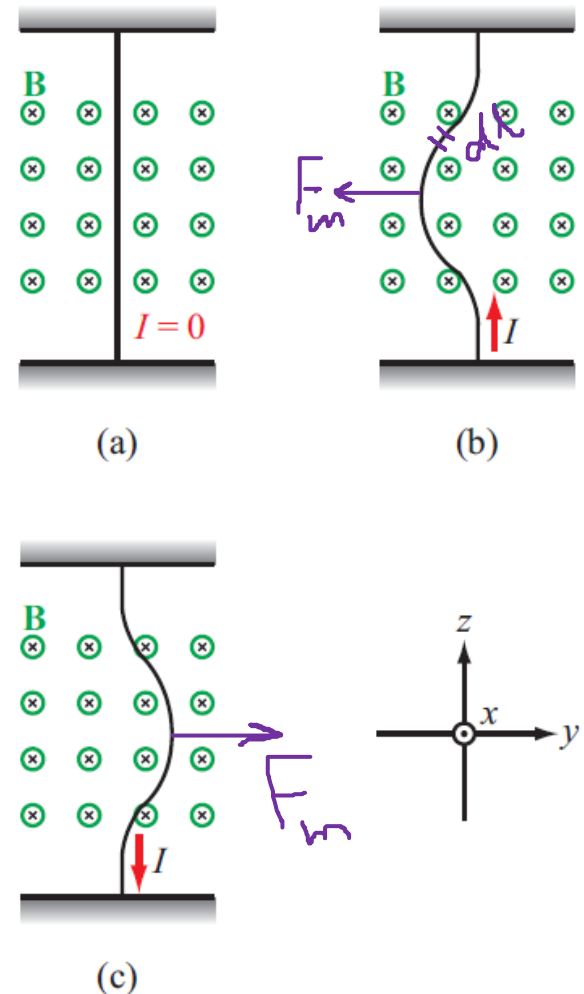


Figure 5-2: When a slightly flexible vertical wire is placed in a magnetic field directed into the page (as denoted by the crosses), it is (a) not deflected when the current through it is zero, (b) deflected to the left when I is upward, and (c) deflected to the right when I is downward.

Torque

$$\mathbf{T} = \mathbf{d} \times \mathbf{F} \quad (\text{N}\cdot\text{m})$$

\mathbf{d} = moment arm

\mathbf{F} = force

\mathbf{T} = torque

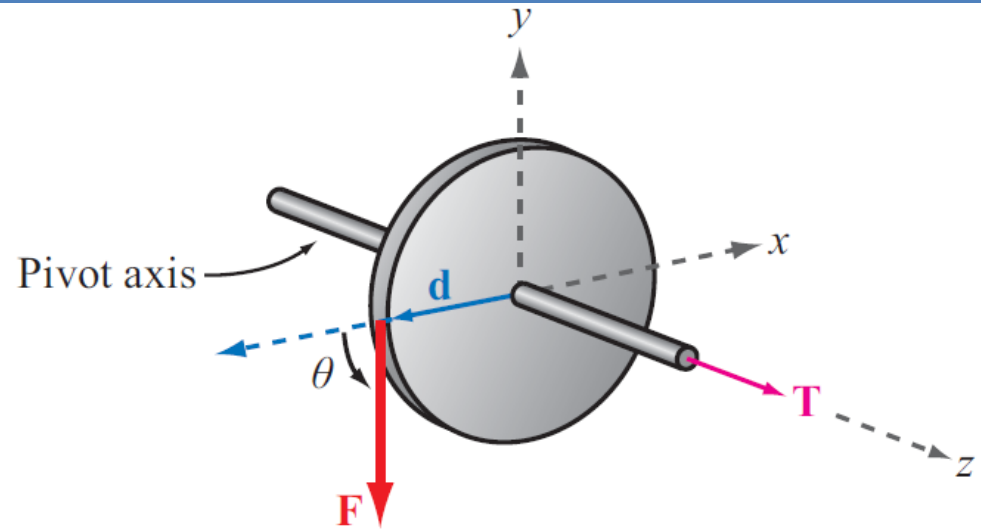


Figure 5-5: The force \mathbf{F} acting on a circular disk that can pivot along the z-axis generates a torque $\mathbf{T} = \mathbf{d} \times \mathbf{F}$ that causes the disk to rotate.

*These directions are governed by the following **right-hand rule**: when the thumb of the right hand points along the direction of the torque, the four fingers indicate the direction that the torque tries to rotate the body.*

Magnetic Torque on Current Loop

$$\mathbf{F}_1 = I(-\hat{y}b) \times (\hat{x}B_0) = \hat{z}IbB_0,$$

$$\mathbf{F}_3 = I(\hat{y}b) \times (\hat{x}B_0) = -\hat{z}IbB_0.$$

No forces on arms 2 and 4 (because I and B are parallel, or anti-parallel)

Magnetic torque:

$$\begin{aligned} \mathbf{T} &= \mathbf{d}_1 \times \mathbf{F}_1 + \mathbf{d}_3 \times \mathbf{F}_3 \\ &= \left(-\hat{x} \frac{a}{2}\right) \times (\hat{z}IbB_0) + \left(\hat{x} \frac{a}{2}\right) \times (-\hat{z}IbB_0) \\ &= \hat{y}IabB_0 = \hat{y}IA\uparrow B_0, \end{aligned}$$

Area of Loop

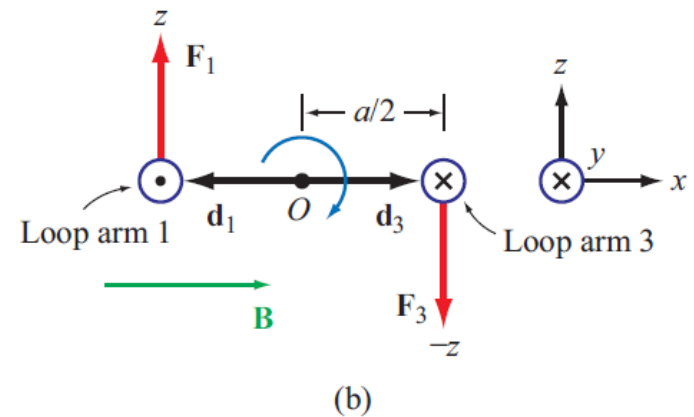
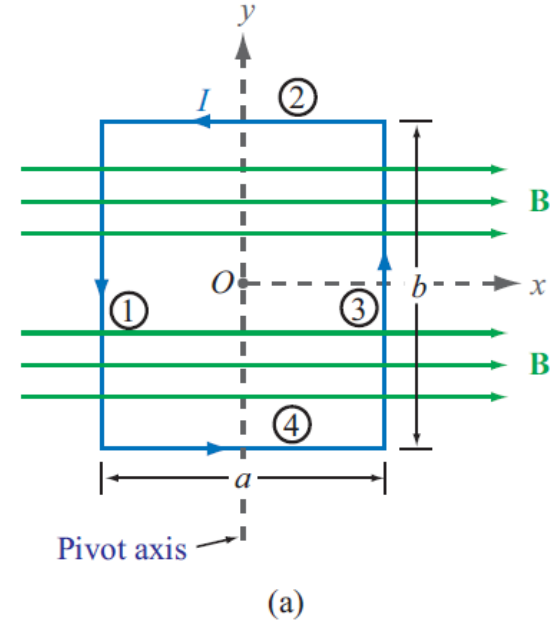


Figure 5-6: Rectangular loop pivoted along the y-axis: (a) front view and (b) bottom view. The combination of forces \mathbf{F}_1 and \mathbf{F}_3 on the loop generates a torque that tends to rotate the loop in a clockwise direction as shown in (b).

Inclined Loop

For a loop with N turns and whose surface normal is at angle θ relative to B direction:

$$T = N I A B_0 \sin \theta. \quad (5.18)$$

The quantity NIA is called the *magnetic moment* m of the loop. Now, consider the vector

$$\mathbf{m} = \hat{\mathbf{n}} N I A = \hat{\mathbf{n}} m \quad (\text{A}\cdot\text{m}^2), \quad (5.19)$$

where $\hat{\mathbf{n}}$ is the surface normal of the loop and governed by the following *right-hand rule*: when the four fingers of the right hand advance in the direction of the current I , the direction of the thumb specifies the direction of $\hat{\mathbf{n}}$. In terms of \mathbf{m} , the torque vector \mathbf{T} can be written as

$$\mathbf{T} = \mathbf{m} \times \mathbf{B} \quad (\text{N}\cdot\text{m}). \quad (5.20)$$

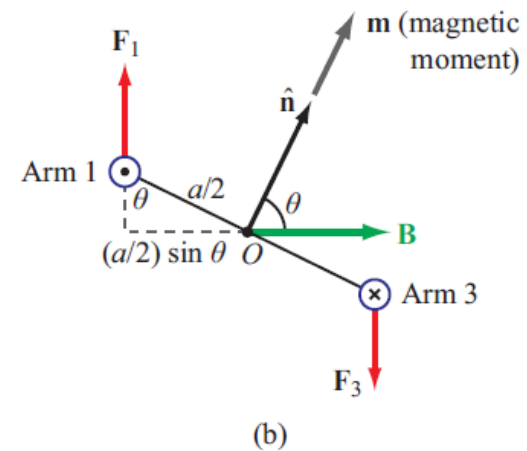
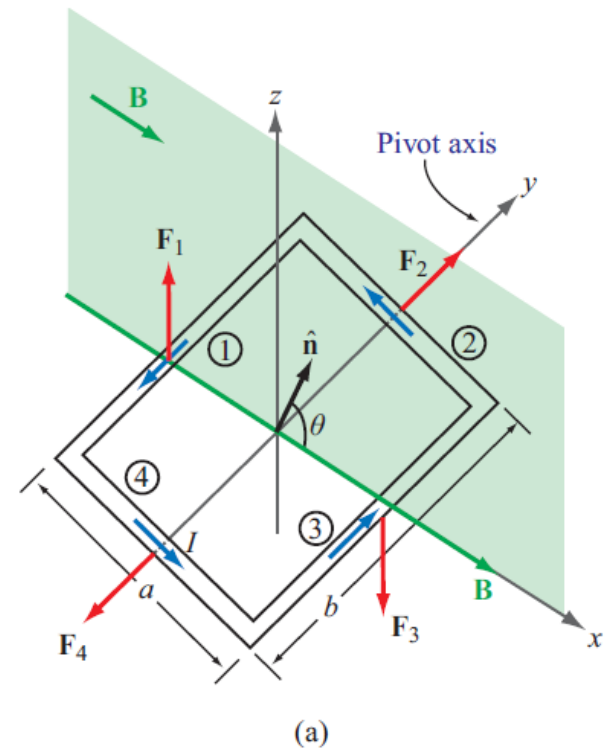


Figure 5-7: Rectangular loop in a uniform magnetic field with flux density \mathbf{B} whose direction is perpendicular to the rotation axis of the loop, but makes an angle θ with the loop's surface normal $\hat{\mathbf{n}}$.

Biot-Savart Law

Magnetic field induced by a differential current:

$$d\mathbf{H} = \frac{I}{4\pi} \frac{d\mathbf{l} \times \hat{\mathbf{R}}}{R^2} \quad (\text{A/m})$$

For the entire length:

$$\mathbf{H} = \frac{I}{4\pi} \int_l \frac{d\mathbf{l} \times \hat{\mathbf{R}}}{R^2} \quad (\text{A/m}), \quad (5.22)$$

where l is the line path along which I exists.

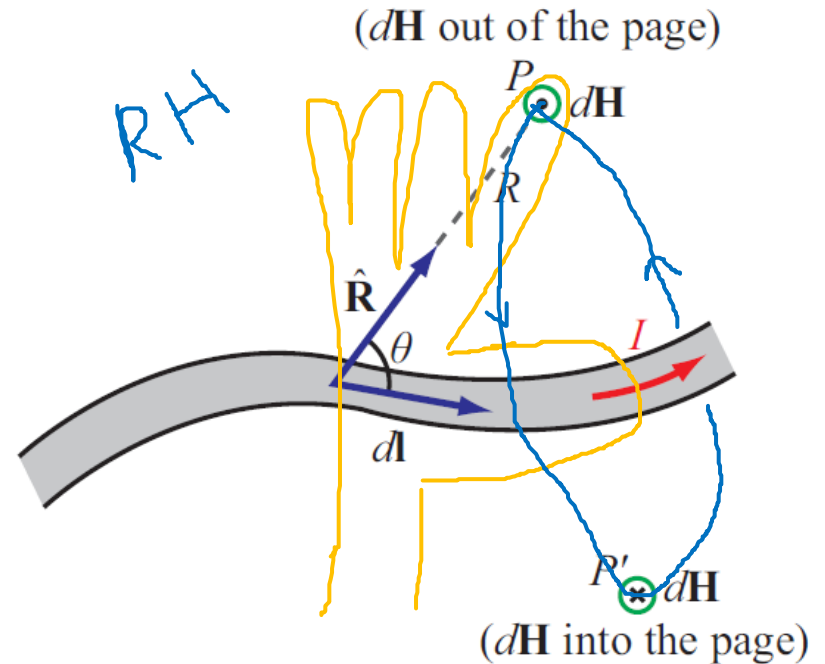
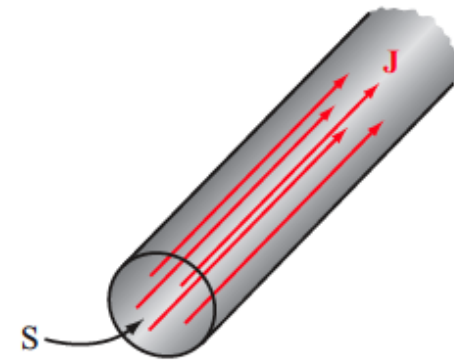


Figure 5-8: Magnetic field $d\mathbf{H}$ generated by a current element $I d\mathbf{l}$. The direction of the field induced at point P is opposite to that induced at point P' .

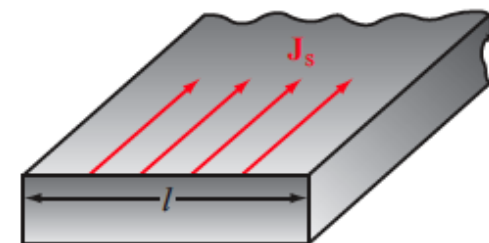
Magnetic Field due to Current Densities

$$\mathbf{H} = \frac{1}{4\pi} \int_S \frac{\mathbf{J}_s \times \hat{\mathbf{R}}}{R^2} ds \quad (\text{surface current}),$$

$$\mathbf{H} = \frac{1}{4\pi} \int_V \frac{\mathbf{J} \times \hat{\mathbf{R}}}{R^2} dV \quad (\text{volume current}).$$



(a) Volume current density \mathbf{J} in A/m²



(b) Surface current density \mathbf{J}_s in A/m

Figure 5-9: (a) The total current crossing the cross section S of the cylinder is $I = \int_S \mathbf{J} \cdot d\mathbf{s}$. (b) The total current flowing across the surface of the conductor is $I = \int_l \mathbf{J}_s dl$.

Example 5-2: Magnetic Field of Linear Conductor

Solution: From Fig. 5-10, the differential length vector $d\mathbf{l} = \hat{\mathbf{z}} dz$. Hence, $d\mathbf{l} \times \hat{\mathbf{R}} = dz (\hat{\mathbf{z}} \times \hat{\mathbf{R}}) = \hat{\phi} \sin \theta dz$, where $\hat{\phi}$ is the azimuth direction and θ is the angle between $d\mathbf{l}$ and $\hat{\mathbf{R}}$. Application of Eq. (5.22) gives

$$\mathbf{H} = \frac{I}{4\pi} \int_{z=-l/2}^{z=l/2} \frac{d\mathbf{l} \times \hat{\mathbf{R}}}{R^2} = \hat{\phi} \frac{I}{4\pi} \int_{-l/2}^{l/2} \frac{\sin \theta}{R^2} dz. \quad (5.25)$$

Both R and θ are dependent on the integration variable z , but the radial distance r is not. For convenience, we will convert the integration variable from z to θ by using the transformations

$$R = r \csc \theta, \quad (5.26a)$$

$$z = -r \cot \theta, \quad (5.26b)$$

$$dz = r \csc^2 \theta d\theta. \quad (5.26c)$$

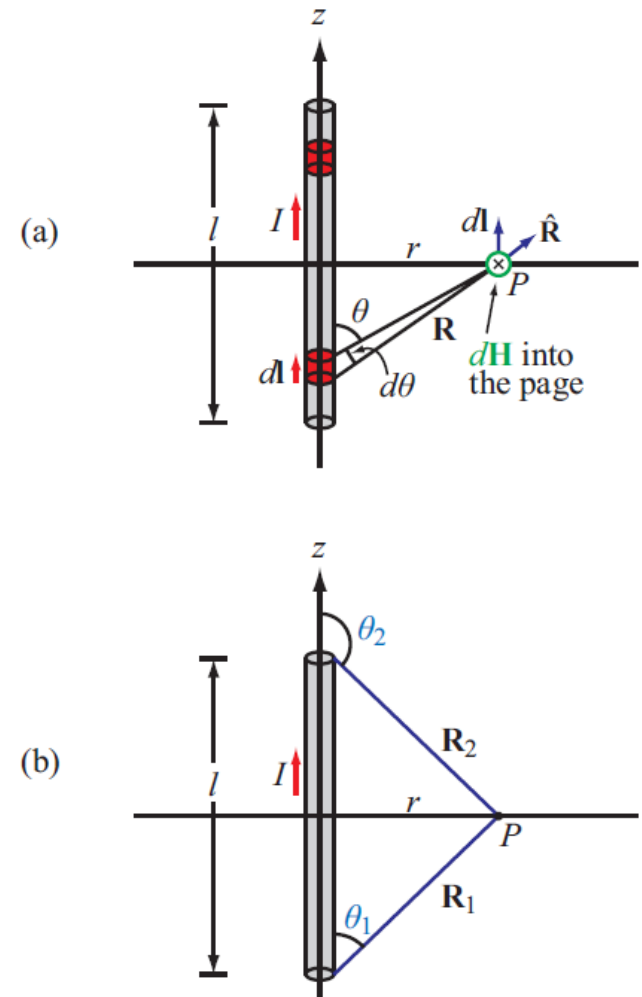


Figure 5-10: Linear conductor of length l carrying a current I . (a) The field $d\mathbf{H}$ at point P due to incremental current element $d\mathbf{l}$. (b) Limiting angles θ_1 and θ_2 , each measured between vector $I d\mathbf{l}$ and the vector connecting the end of the conductor associated with that angle to point P (Example 5-2).

Upon inserting Eqs. (5.26a) and (5.26c) into Eq. (5.25), we have

$$\begin{aligned} \mathbf{H} &= \hat{\phi} \frac{I}{4\pi} \int_{\theta_1}^{\theta_2} \frac{\sin \theta r \csc^2 \theta d\theta}{r^2 \csc^2 \theta} \\ &= \hat{\phi} \frac{I}{4\pi r} \int_{\theta_1}^{\theta_2} \sin \theta d\theta \\ &= \hat{\phi} \frac{I}{4\pi r} (\cos \theta_1 - \cos \theta_2), \end{aligned} \quad (5.27)$$

where θ_1 and θ_2 are the limiting angles at $z = -l/2$ and $z = l/2$, respectively. From the right triangle in Fig. 5-10(b), it follows that

$$\cos \theta_1 = \frac{l/2}{\sqrt{r^2 + (l/2)^2}}, \quad (5.28a)$$

$$\cos \theta_2 = -\cos \theta_1 = \frac{-l/2}{\sqrt{r^2 + (l/2)^2}}. \quad (5.28b)$$

Hence,

$$\mathbf{B} = \mu_0 \mathbf{H} = \hat{\phi} \frac{\mu_0 I l}{2\pi r \sqrt{4r^2 + l^2}} \quad (\text{T}). \quad (5.29)$$

For an infinitely long wire with $l \gg r$, Eq. (5.29) reduces to

$$\mathbf{B} = \hat{\phi} \frac{\mu_0 I}{2\pi r} \quad (\text{infinitely long wire}). \quad (5.30)$$

Example 5-2: Magnetic Field of Linear Conductor

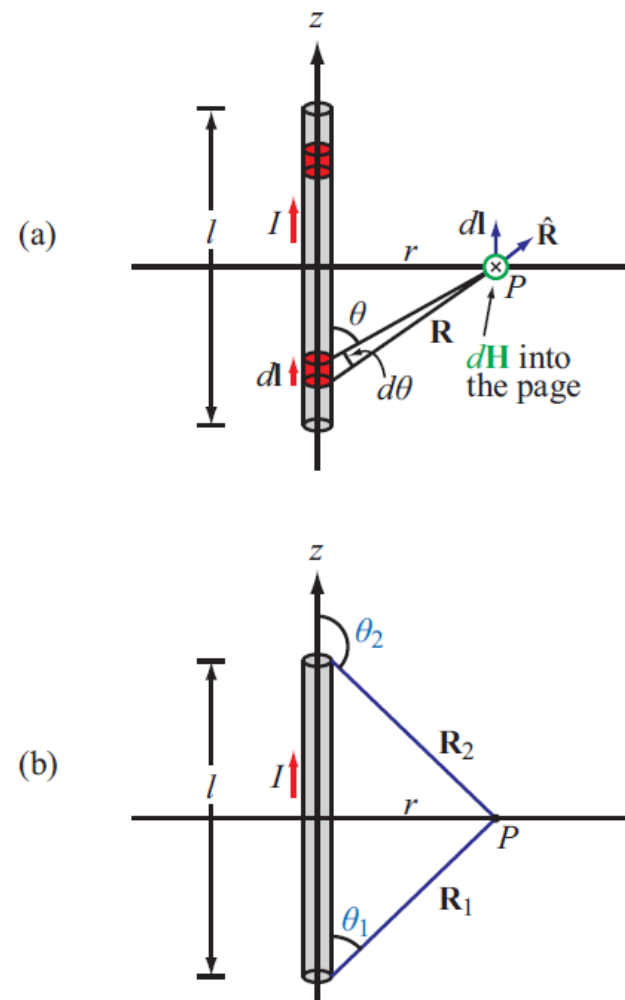
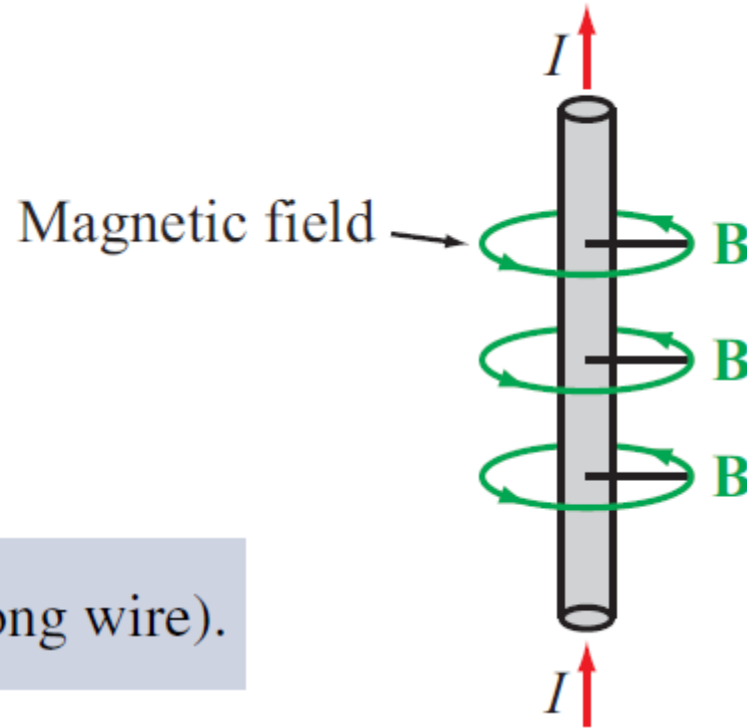


Figure 5-10: Linear conductor of length l carrying a current I . (a) The field $d\mathbf{H}$ at point P due to incremental current element $d\mathbf{l}$. (b) Limiting angles θ_1 and θ_2 , each measured between vector $I d\mathbf{l}$ and the vector connecting the end of the conductor associated with that angle to point P (Example 5-2).

Magnetic Field of Long Conductor



$$\mathbf{B} = \hat{\phi} \frac{\mu_0 I}{2\pi r} \quad (\text{infinitely long wire}).$$

Module 5.2

Magnetic Fields due to Line Sources

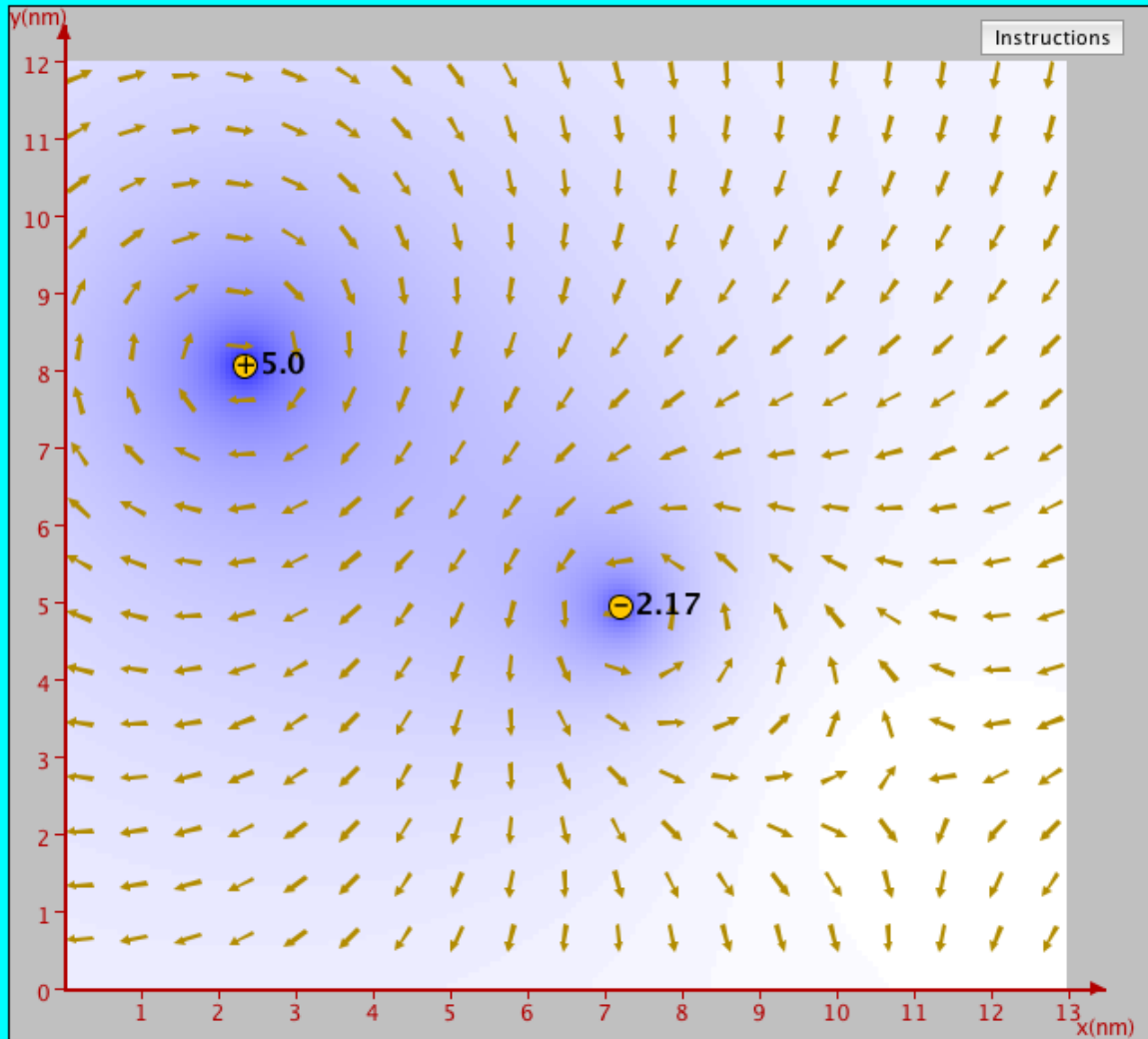
Input

line source = A

- add line source
- edit current value
- delete line source
- drag line source
- display magnetic field at cursor:

B = A/m

Clear



Example 5-3: Magnetic Field of a Loop

Magnitude of field due to $d\mathbf{l}$ is

$$dH = \frac{I}{4\pi R^2} |d\mathbf{l} \times \hat{\mathbf{R}}| = \frac{I dl}{4\pi (a^2 + z^2)}$$

$d\mathbf{H}$ is in the r - z plane, and therefore it has components dH_r and dH_z

z-components of the magnetic fields due to $d\mathbf{l}$ and $d\mathbf{l}'$ **add** because they are in the same direction, but their **r-components cancel**

Hence for element $d\mathbf{l}$:

$$d\mathbf{H} = \hat{\mathbf{z}} dH_z = \hat{\mathbf{z}} dH \cos \theta = \hat{\mathbf{z}} \frac{I \cos \theta}{4\pi (a^2 + z^2)} dl$$

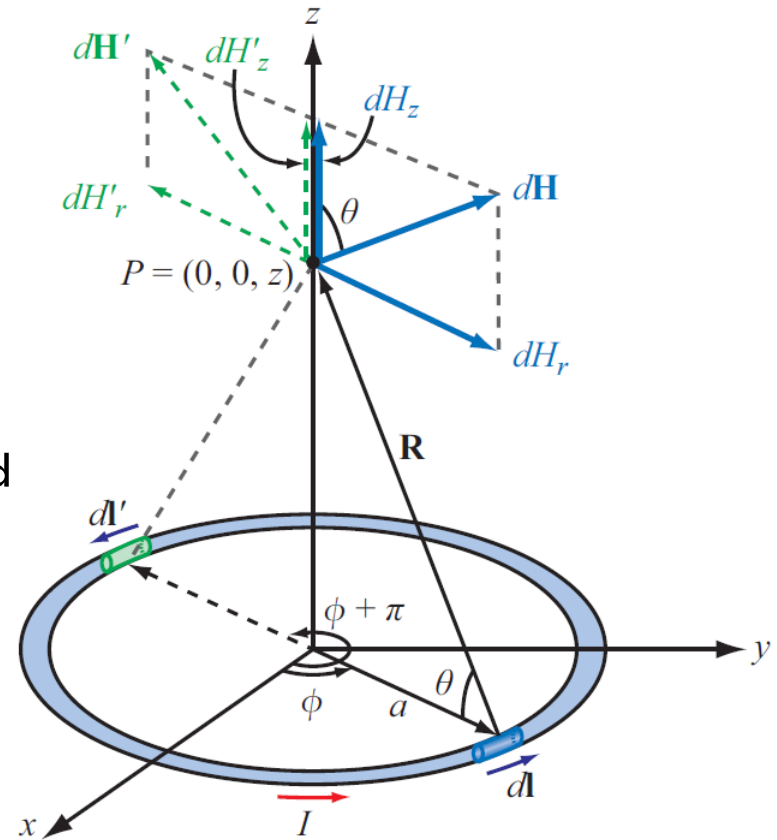


Figure 5-12: Circular loop carrying a current I (Example 5-3).

Example 5-3: Magnetic Field of a Loop (cont.)

For the entire loop:

$$\mathbf{H} = \hat{\mathbf{z}} \frac{I \cos \theta}{4\pi(a^2 + z^2)} \oint dl = \hat{\mathbf{z}} \frac{I \cos \theta}{4\pi(a^2 + z^2)} (2\pi a). \quad (5.33)$$

Upon using the relation $\cos \theta = a/(a^2 + z^2)^{1/2}$, we obtain

$$\mathbf{H} = \hat{\mathbf{z}} \frac{Ia^2}{2(a^2 + z^2)^{3/2}} \quad (\text{A/m}). \quad (5.34)$$

At the center of the loop ($z = 0$), Eq. (5.34) reduces to

$$\mathbf{H} = \hat{\mathbf{z}} \frac{I}{2a} \quad (\text{at } z = 0), \quad (5.35)$$

and at points very far away from the loop such that $z^2 \gg a^2$, Eq. (5.34) simplifies to

$$\mathbf{H} = \hat{\mathbf{z}} \frac{Ia^2}{2|z|^3} \quad (\text{at } |z| \gg a). \quad (5.36)$$

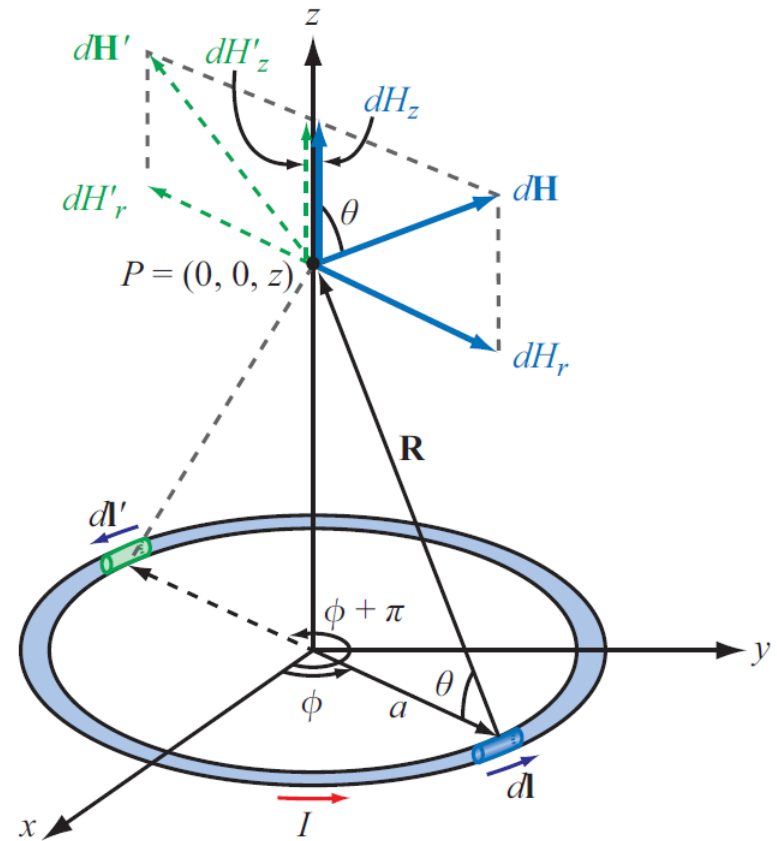



Figure 5-12: Circular loop carrying a current I (Example 5-3).

z-axis location = 0.05 [m]

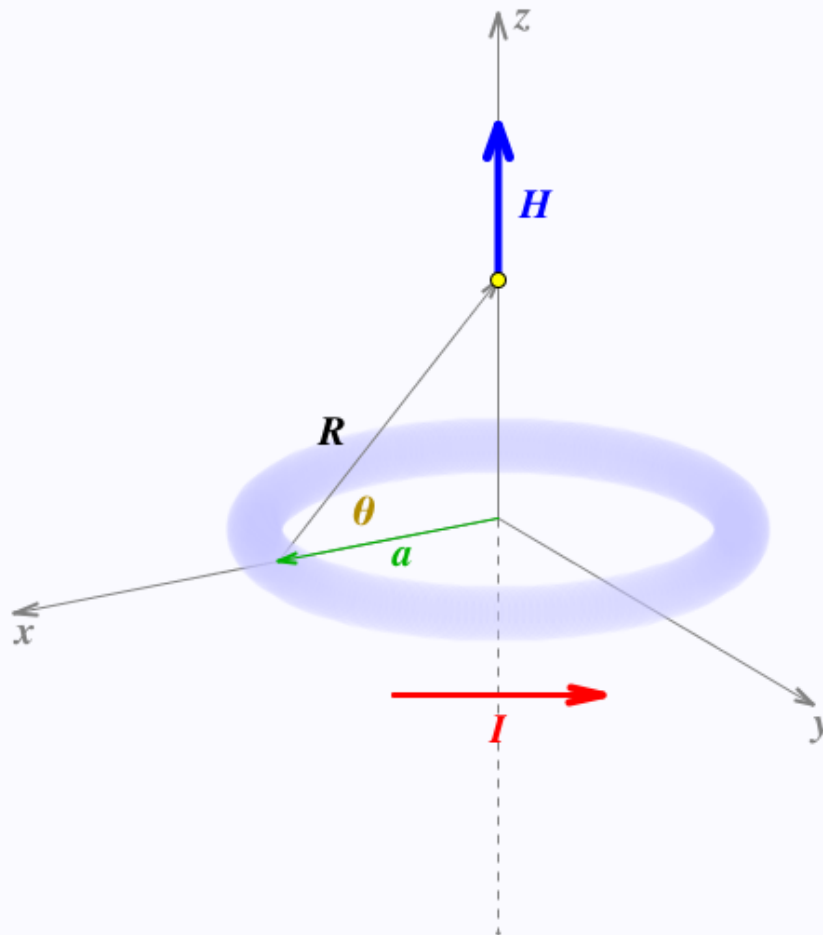
Loop Current $I = 1.0$ [A]Loop Radius $a = 0.05$ [m] Show Labels on Graph Total H Field Integrand dH

$$H(0, 0, z) = 3.535534 \text{ [A/m]}$$

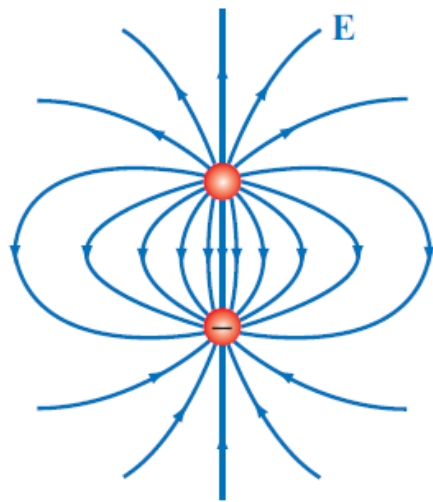
$$H_{max} = H(0, 0, 0) = 10.0 \text{ [A/m]}$$

$$R = 0.070711 \text{ [m]}$$

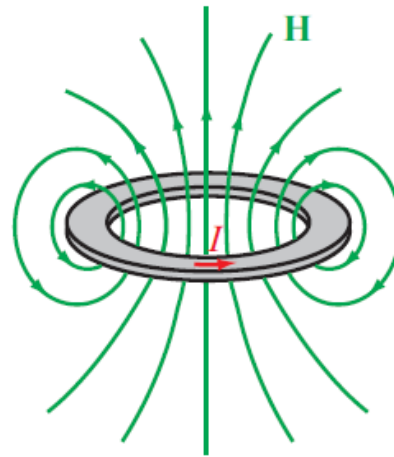
$$\theta = 45.0^\circ$$

[Instructions](#)

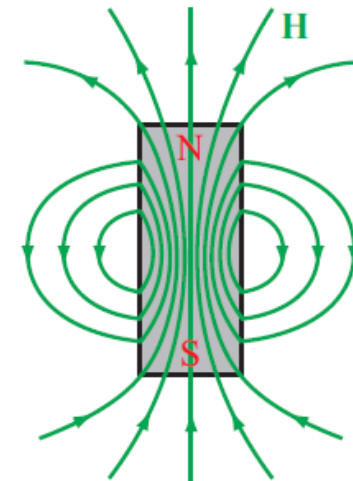
Magnetic Dipole



(a) Electric dipole



(b) Magnetic dipole



(c) Bar magnet

Figure 5-13: Patterns of (a) the electric field of an electric dipole, (b) the magnetic field of a magnetic dipole, and (c) the magnetic field of a bar magnet. Far away from the sources, the field patterns are similar in all three cases.

Because a circular loop exhibits a magnetic field pattern similar to the electric field of an electric dipole, it is called a *magnetic dipole*

Forces on Parallel Conductors

$$\mathbf{B}_1 = -\hat{\mathbf{x}} \frac{\mu_0 I_1}{2\pi d} . \quad (5.39)$$

The force \mathbf{F}_2 exerted on a length l of wire I_2 due to its presence in field \mathbf{B}_1 may be obtained by applying Eq. (5.12):

$$\begin{aligned} \mathbf{F}_2 &= I_2 l \hat{\mathbf{z}} \times \mathbf{B}_1 = I_2 l \hat{\mathbf{z}} \times (-\hat{\mathbf{x}}) \frac{\mu_0 I_1}{2\pi d} \\ &= -\hat{\mathbf{y}} \frac{\mu_0 I_1 I_2 l}{2\pi d} , \end{aligned} \quad (5.40)$$

and the corresponding force per unit length is

$$\mathbf{F}'_2 = \frac{\mathbf{F}_2}{l} = -\hat{\mathbf{y}} \frac{\mu_0 I_1 I_2}{2\pi d} . \quad (5.41)$$

A similar analysis performed for the force per unit length exerted on the wire carrying I_1 leads to

$$\mathbf{F}'_1 = \hat{\mathbf{y}} \frac{\mu_0 I_1 I_2}{2\pi d} . \quad (5.42)$$

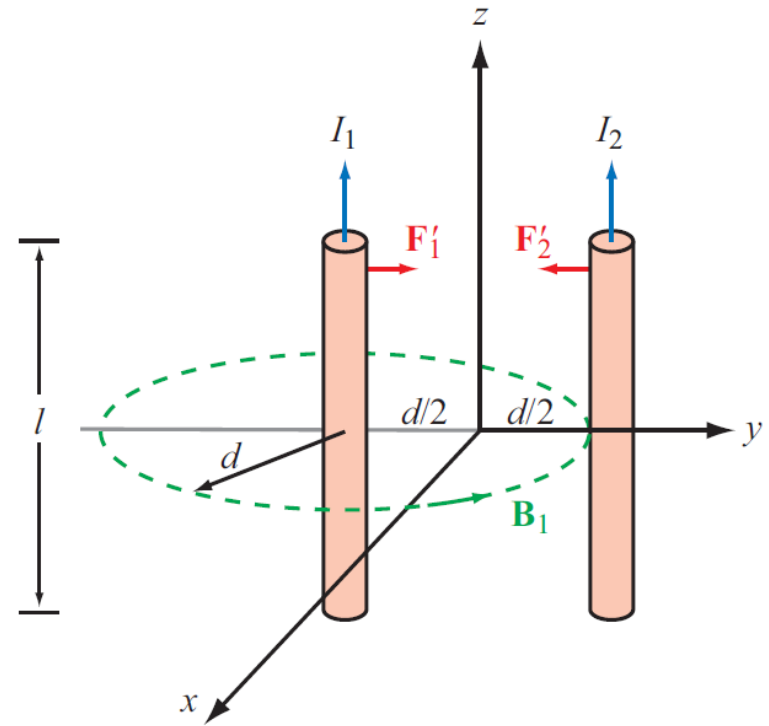


Figure 5-14: Magnetic forces on parallel current-carrying conductors.

Parallel wires attract if their currents are in the same direction, and repel if currents are in opposite directions

Module 5.4

Magnetic Force Between Two Parallel Conductors

Distance $d = 0.5$ [m]



Current $I_1 = 1.0$ [A]



Current $I_2 = 1.0$ [A]



Wire Length $l = 0.5$ [m]



Magnetic Induction

$$B_1 = -0.4 \times 10^{-6} \hat{x} \text{ [T]}$$

$$B_2 = 0.4 \times 10^{-6} \hat{x} \text{ [T]}$$

Total Magnetic Force on Wires

$$F_1 = 0.2 \times 10^{-6} \hat{y} \text{ [N]}$$

$$F_2 = -0.2 \times 10^{-6} \hat{y} \text{ [N]}$$

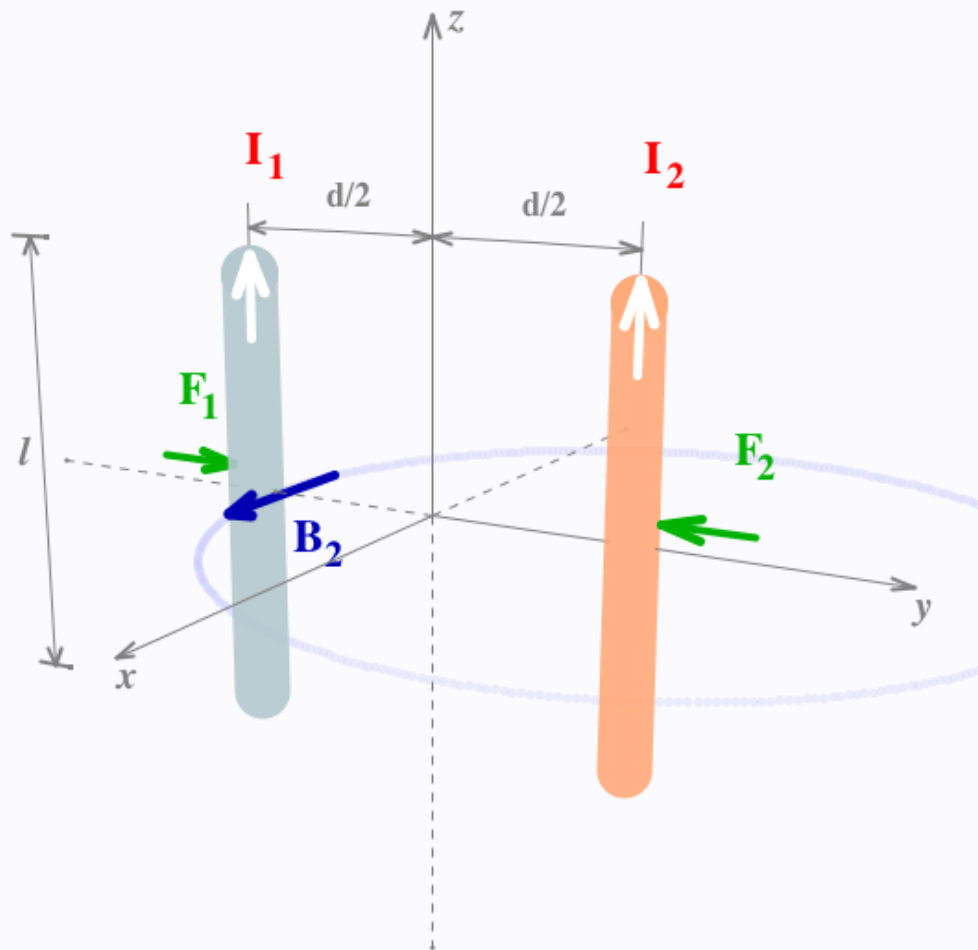
Magnetic Force per Unit Length

$$F'_1 = 0.4 \times 10^{-6} \hat{y} \text{ [N/m]}$$

$$F'_2 = -0.4 \times 10^{-6} \hat{y} \text{ [N/m]}$$

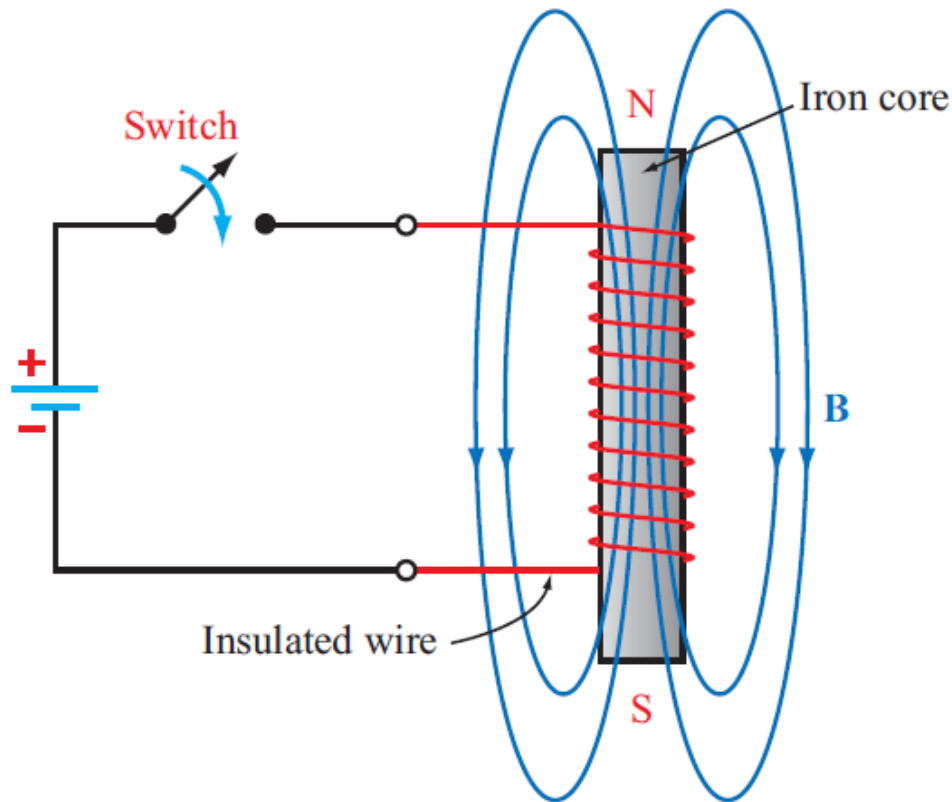
Instructions

B_1 B_2

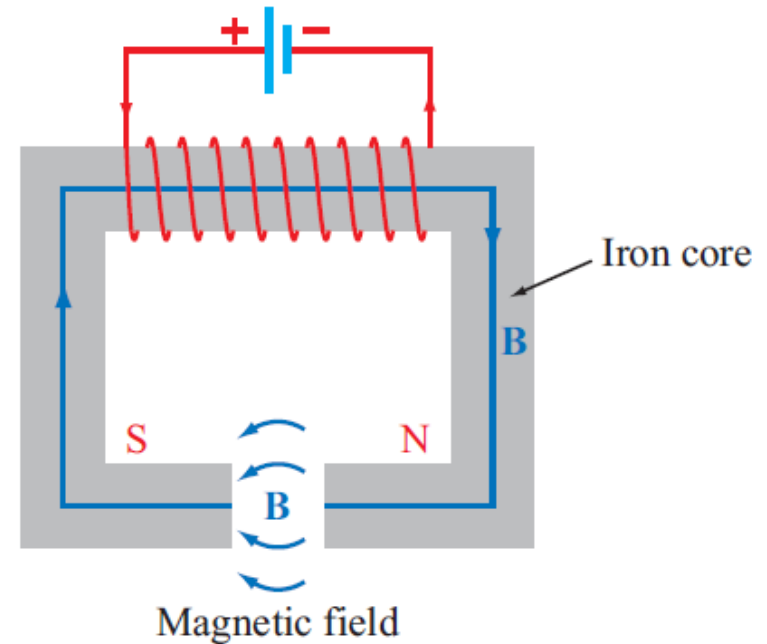


Wires attract each other with equal force

Tech Brief 10: Electromagnets



(a) Solenoid



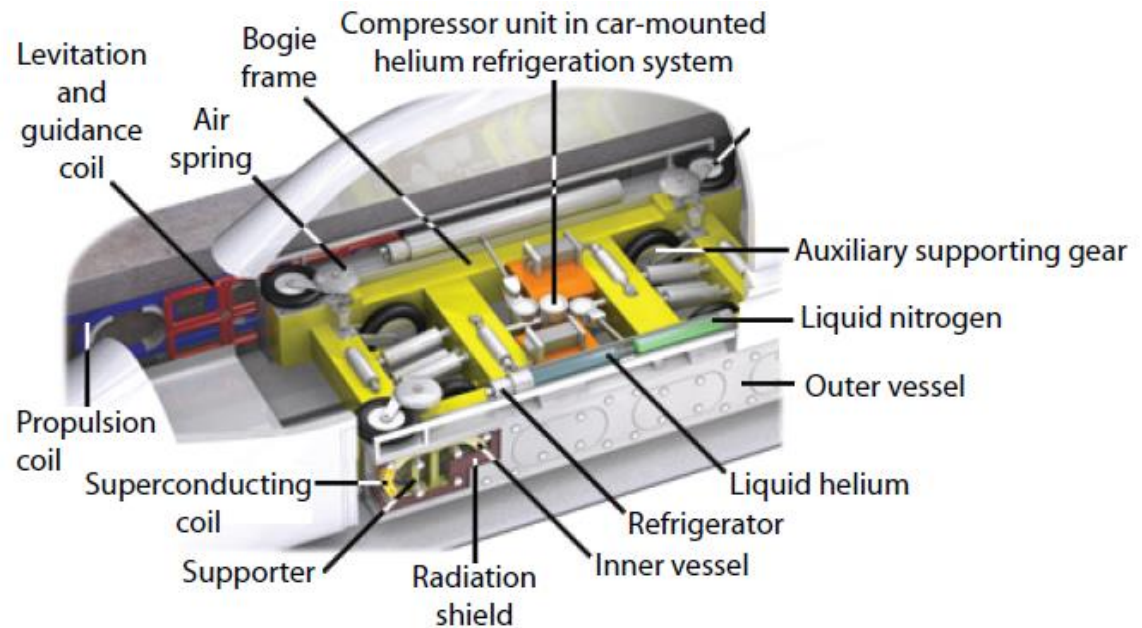
(b) Horseshoe electromagnet

Figure TF10-1: Solenoid and horseshoe magnets.

Magnetic Levitation



(a) Maglev train



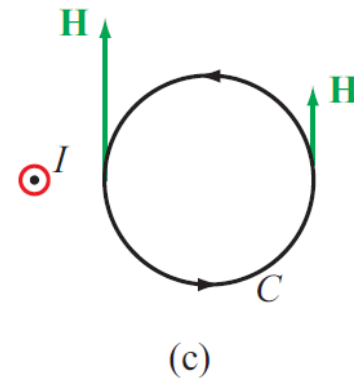
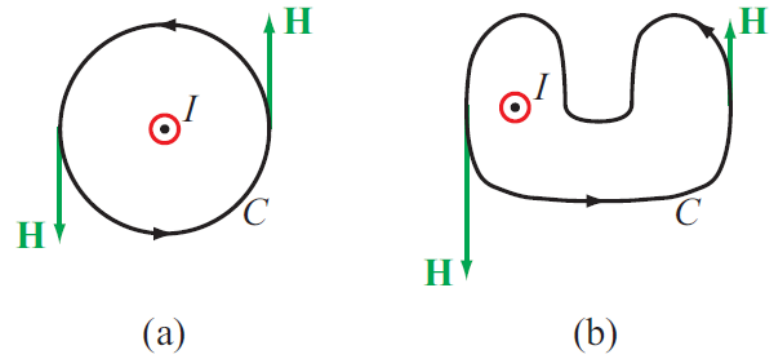
(b) Internal workings of the Maglev train

Figure TF10-5: Magnetic trains. (Courtesy Shanghai.com.)

<https://www.youtube.com/watch?v=Wor8C3ZIAu8>

Ampère's Law

$$\nabla \times \mathbf{H} = \mathbf{J} \quad \longleftrightarrow \quad \oint_C \mathbf{H} \cdot d\boldsymbol{\ell} = I$$



The sign convention for the direction of the contour path C in Ampère's law is taken so that I and \mathbf{H} satisfy the right-hand rule defined earlier in connection with the Biot–Savart law. That is, if the direction of I is aligned with the direction of the thumb of the right hand, then the direction of the contour C should be chosen along that of the other four fingers.

Figure 5-16: Ampère's law states that the line integral of \mathbf{H} around a closed contour C is equal to the current traversing the surface bounded by the contour. This is true for contours (a) and (b), but the line integral of \mathbf{H} is zero for the contour in (c) because the current I (denoted by the symbol \odot) is not enclosed by the contour C .

Internal Magnetic Field of Long Conductor

For $r < a$

$$\oint \mathbf{H}_1 \cdot d\mathbf{l}_1 = I_1,$$

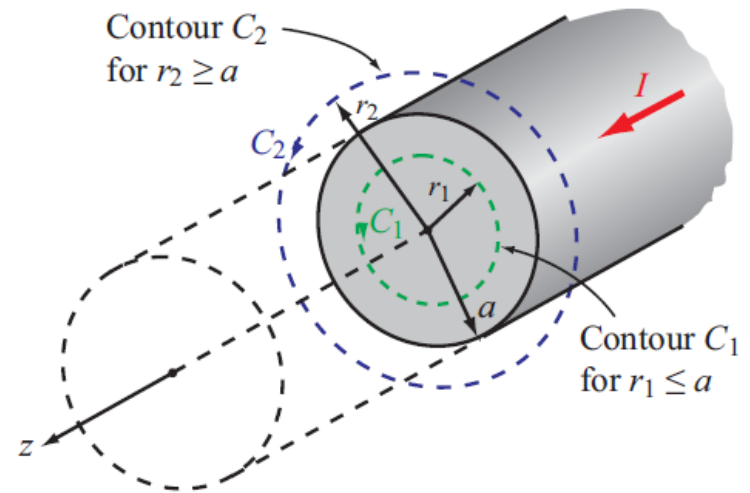
$$\oint_{C_1} \mathbf{H}_1 \cdot d\mathbf{l}_1 = \int_0^{2\pi} H_1(\hat{\phi} \cdot \hat{\phi}) r_1 d\phi = 2\pi r_1 H_1.$$

The current I_1 flowing through the area enclosed by C_1 is equal to the total current I multiplied by the ratio of the area enclosed by C_1 to the total cross-sectional area of the wire:

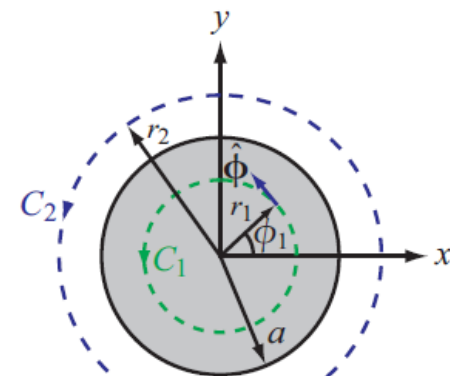
$$I_1 = \left(\frac{\pi r_1^2}{\pi a^2} \right) I = \left(\frac{r_1}{a} \right)^2 I.$$

Equating both sides of Eq. (5.48) and then solving for \mathbf{H}_1 yields

$$\mathbf{H}_1 = \hat{\phi} H_1 = \hat{\phi} \frac{r_1}{2\pi a^2} I \quad (\text{for } r_1 \leq a). \quad (5.49)$$



(a) Cylindrical wire

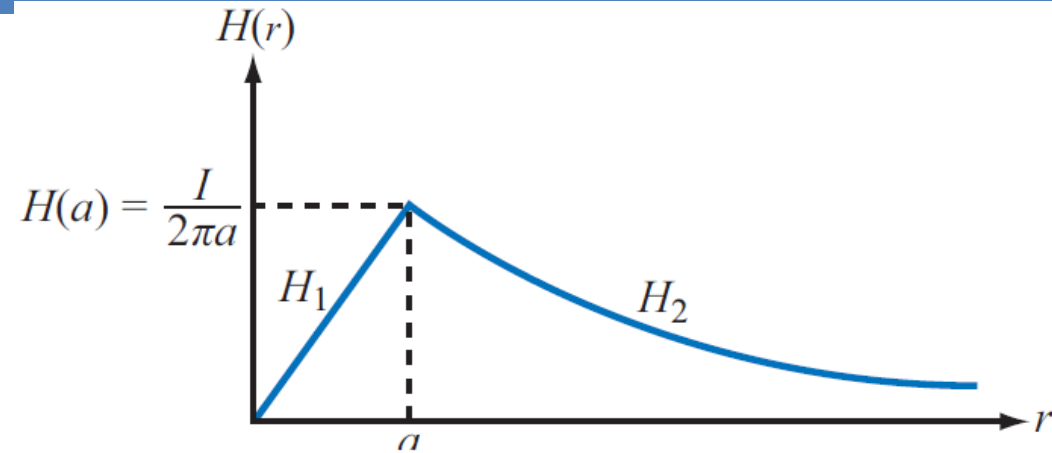


(b) Wire cross section

Cont.

External Magnetic Field of Long Conductor

For $r > a$



(b) For $r = r_2 \geq a$, we choose path C_2 , which encloses all the current I . Hence, $\mathbf{H}_2 = \hat{\phi} H_2$, $d\mathbf{l}_2 = \hat{\phi} r_2 d\phi$, and

$$\oint_{C_2} \mathbf{H}_2 \cdot d\mathbf{l}_2 = 2\pi r_2 H_2 = I,$$

which yields

$$\mathbf{H}_2 = \hat{\phi} H_2 = \hat{\phi} \frac{I}{2\pi r_2} \quad (\text{for } r_2 \geq a). \quad (5.49b)$$

Magnetic Field of Toroid

Applying Ampere's law over contour C :

$$\oint_C \mathbf{H} \cdot d\mathbf{l} = I$$

Ampere's law states that the line integral of \mathbf{H} around a closed contour C is equal to the current traversing the surface bounded by the contour.

$$\oint_C \mathbf{H} \cdot d\mathbf{l} = \int_0^{2\pi} (-\hat{\phi} H) \cdot \hat{\phi} r d\phi = -2\pi r H = -NI.$$

Hence, $H = NI/(2\pi r)$ and

$$\mathbf{H} = -\hat{\phi} H = -\hat{\phi} \frac{NI}{2\pi r} \quad (\text{for } a < r < b).$$

The magnetic field outside the toroid is zero. **Why?**

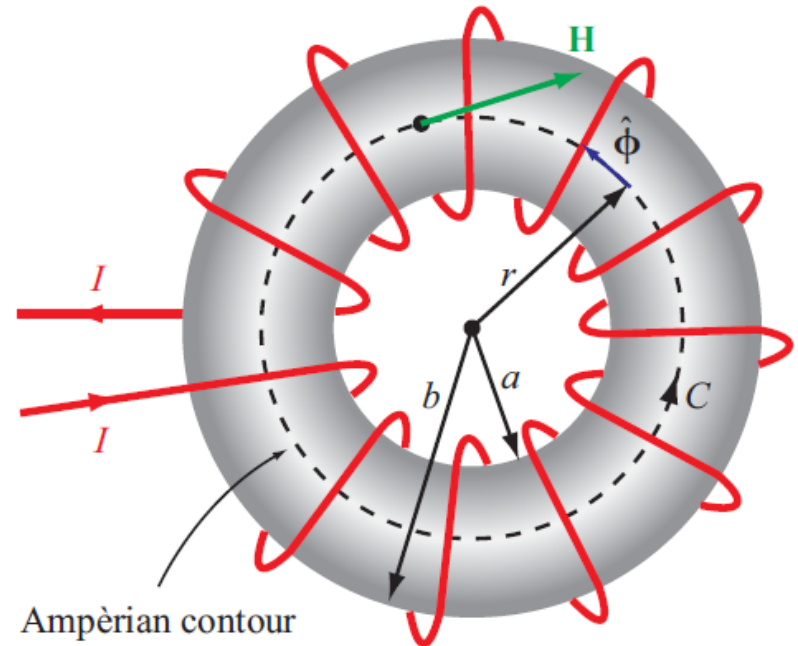


Figure 5-18: Toroidal coil with inner radius a and outer radius b . The wire loops usually are much more closely spaced than shown in the figure (Example 5-5).

Magnetic Vector Potential \mathbf{A}

Electrostatics

$$\mathbf{E} = -\nabla V$$

$$\nabla^2 V = -\frac{\rho_v}{\epsilon}$$

$$V = \frac{1}{4\pi\epsilon} \int_{V'} \frac{\rho_v}{R'} dV'$$

Magnetostatics

$$\mathbf{B} = \nabla \times \mathbf{A} \quad (\text{Wb/m}^2),$$

$$\nabla^2 \mathbf{A} = -\mu \mathbf{J}.$$

$$\mathbf{A} = \frac{\mu}{4\pi} \int_{V'} \frac{\mathbf{J}}{R'} dV' \quad (\text{Wb/m}).$$

Magnetic Properties of Materials

*The magnetic behavior of a material is governed by the interaction of the magnetic dipole moments of its atoms with an external magnetic field. The nature of the behavior depends on the crystalline structure of the material and is used as a basis for classifying materials as **diamagnetic**, **paramagnetic**, or **ferromagnetic**.*

$$\mathbf{B} = \mu_0 \mathbf{H} + \mu_0 \mathbf{M} = \mu_0 (\mathbf{H} + \mathbf{M})$$

$$\mathbf{M} = \chi_m \mathbf{H}$$

$$\mathbf{B} = \mu_0 (\mathbf{H} + \chi_m \mathbf{H}) = \mu_0 (1 + \chi_m) \mathbf{H},$$

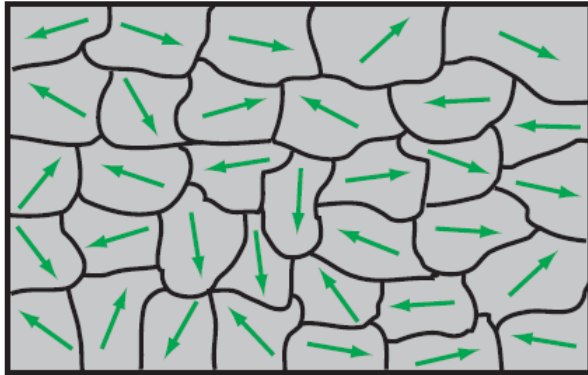
$$\mathbf{B} = \mu \mathbf{H},$$

Table 5-2: Properties of magnetic materials.

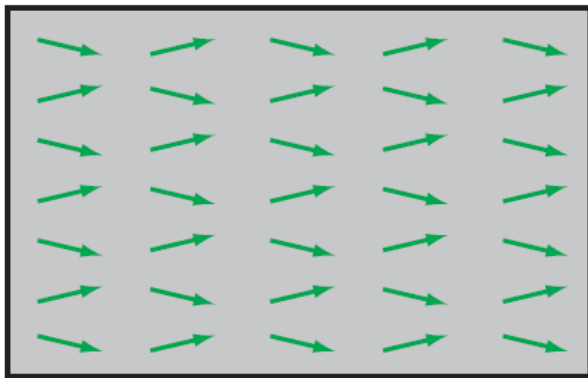
	Diamagnetism	Paramagnetism	Ferromagnetism
Permanent magnetic dipole moment	No	Yes, but weak	Yes, and strong
Primary magnetization mechanism	Electron orbital magnetic moment	Electron spin magnetic moment	Magnetized domains
Direction of induced magnetic field (relative to external field)	Opposite	Same	Hysteresis (see Fig. 5-22)
Common substances	Bismuth, copper, diamond, gold, lead, mercury, silver, silicon	Aluminum, calcium, chromium, magnesium, niobium, platinum, tungsten	Iron, nickel, cobalt
Typical value of χ_m Typical value of μ_r	$\approx -10^{-5}$ ≈ 1	$\approx 10^{-5}$ ≈ 1	$ \chi_m \gg 1$ and hysteretic $ \mu_r \gg 1$ and hysteretic

Thus, $\mu_r \simeq 1$ or $\mu \simeq \mu_0$ for diamagnetic and paramagnetic substances, which include dielectric materials and most metals. In contrast, $|\mu_r| \gg 1$ for ferromagnetic materials; $|\mu_r|$ of purified iron, for example, is on the order of 2×10^5 .

Magnetic Hysteresis



(a) Unmagnetized domains



(b) Magnetized domains

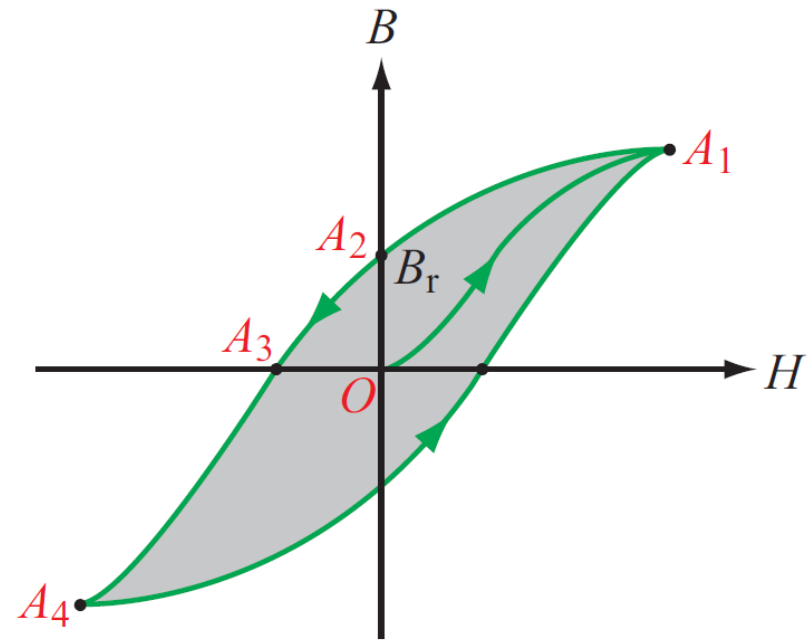
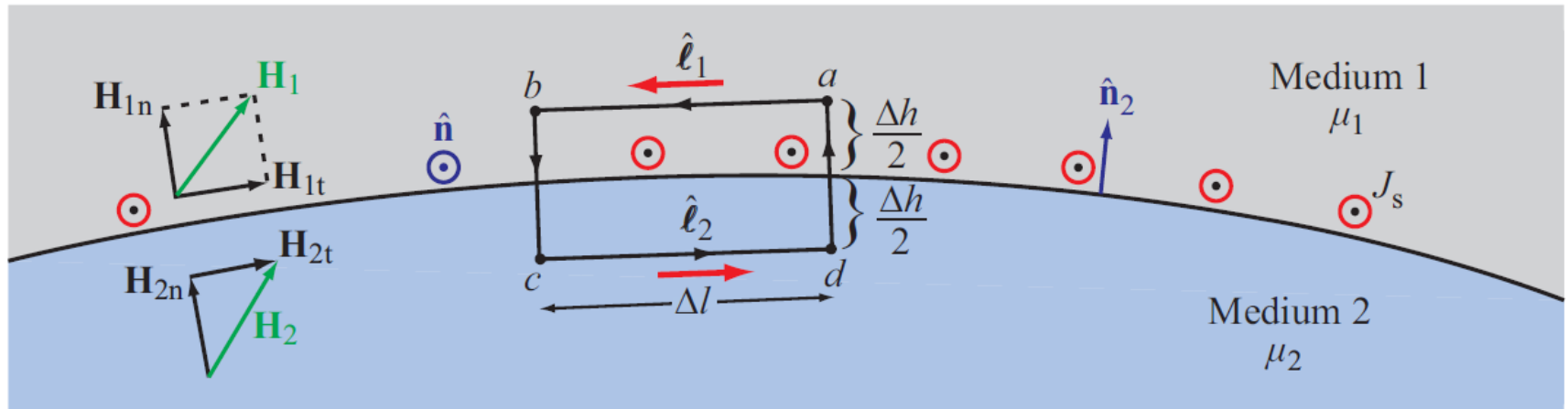


Figure 5-22: Typical hysteresis curve for a ferromagnetic material.

Boundary Conditions



$$\oint_S \mathbf{D} \cdot d\mathbf{s} = Q \quad \rightarrow \quad D_{1n} - D_{2n} = \rho_s. \quad (5.78)$$

$$\hat{\mathbf{n}}_2 \times (\mathbf{H}_1 - \mathbf{H}_2) = \mathbf{J}_s.$$

By analogy, application of Gauss's law for magnetism, as expressed by Eq. (5.44), leads to the conclusion that

$$\oint_S \mathbf{B} \cdot d\mathbf{s} = 0 \quad \rightarrow \quad B_{1n} = B_{2n}. \quad (5.79)$$

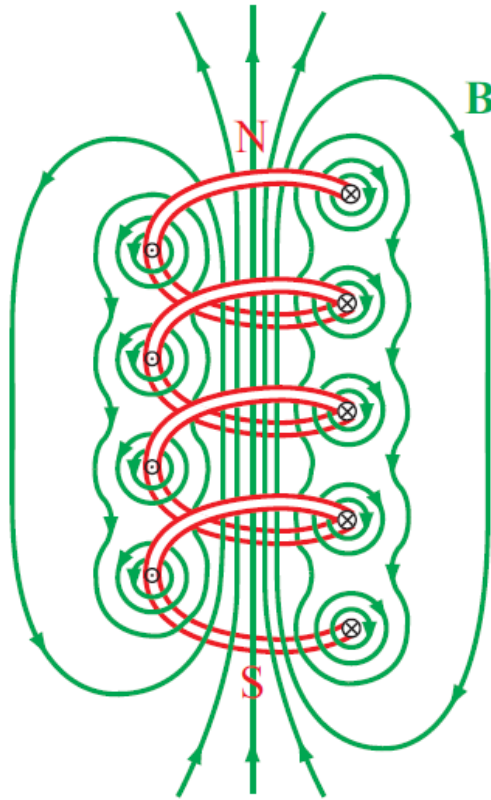
Surface currents can exist only on the surfaces of perfect conductors and superconductors. Hence, *at the interface between media with finite conductivities*, $\mathbf{J}_s = 0$ and

$$H_{1t} = H_{2t}. \quad (5.85)$$

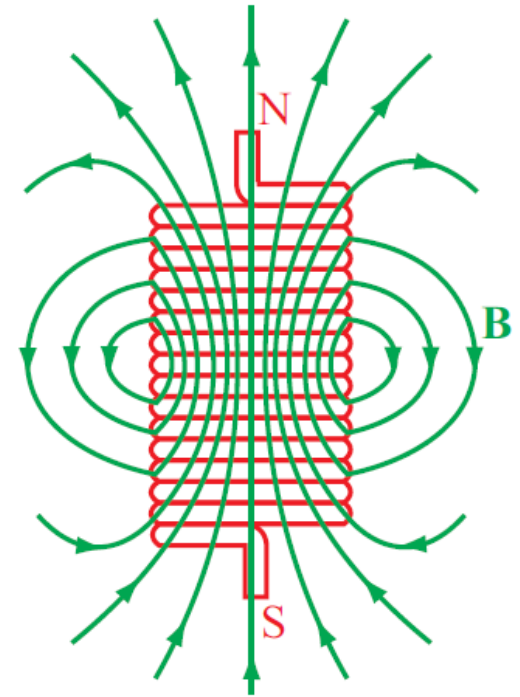
Thus the normal component of \mathbf{B} is continuous across the boundary between two adjacent media.

Solenoid

Coil
Inductor
para



(a) Loosely wound solenoid



(b) Tightly wound solenoid

Inside the solenoid:

$$\mathbf{B} \simeq \hat{\mathbf{z}}\mu nI = \frac{\hat{\mathbf{z}}\mu NI}{l} \quad (\text{long solenoid with } l/a \gg 1)$$

and for two-conductor configurations similar to those of Fig. 5-27,

Inductance

Magnetic Flux

$$\Phi = \int_S \mathbf{B} \cdot d\mathbf{s} \quad (\text{Wb}).$$

Flux Linkage

$$\Lambda = N\Phi = \mu \frac{N^2}{l} IS \quad (\text{Wb})$$

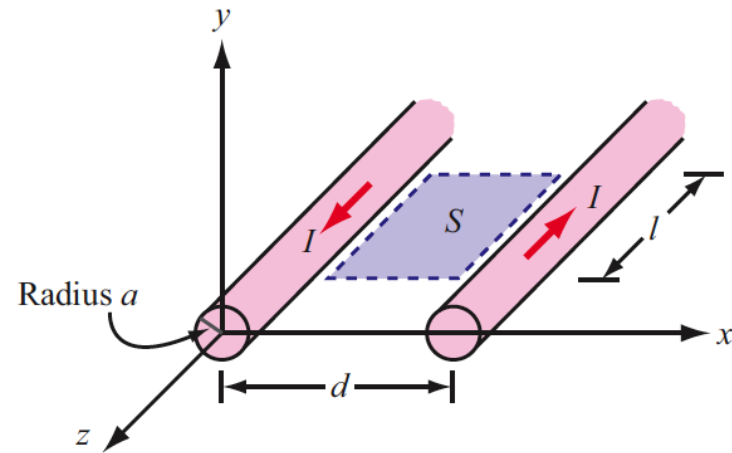
Inductance

$$L = \frac{\Lambda}{I} \quad (\text{H}).$$

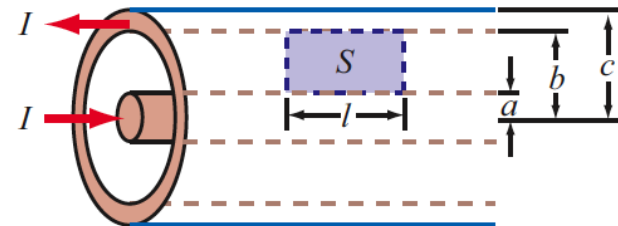
Solenoid

$$L = \mu \frac{N^2}{l} S \quad (\text{solenoid}), \quad (5.95)$$

$$L = \frac{\Lambda}{I} = \frac{\Phi}{I} = \frac{1}{I} \int_S \mathbf{B} \cdot d\mathbf{s}. \quad (5.96)$$



(a) Parallel-wire transmission line



(b) Coaxial transmission line

Figure 5-27: To compute the inductance per unit length of a two-conductor transmission line, we need to determine the magnetic flux through the area S between the conductors.

Example 5-7: Inductance of Coaxial Cable

The magnetic field in the region S between the two conductors is approximately

$$\mathbf{B} = \hat{\phi} \frac{\mu I}{2\pi r}$$

Total magnetic flux through S :

$$\Phi = l \int_a^b B dr = l \int_a^b \frac{\mu I}{2\pi r} dr = \frac{\mu I l}{2\pi} \ln \left(\frac{b}{a} \right)$$

Inductance per unit length:

$$L' = \frac{L}{l} = \frac{\Phi}{lI} = \frac{\mu}{2\pi} \ln \left(\frac{b}{a} \right).$$

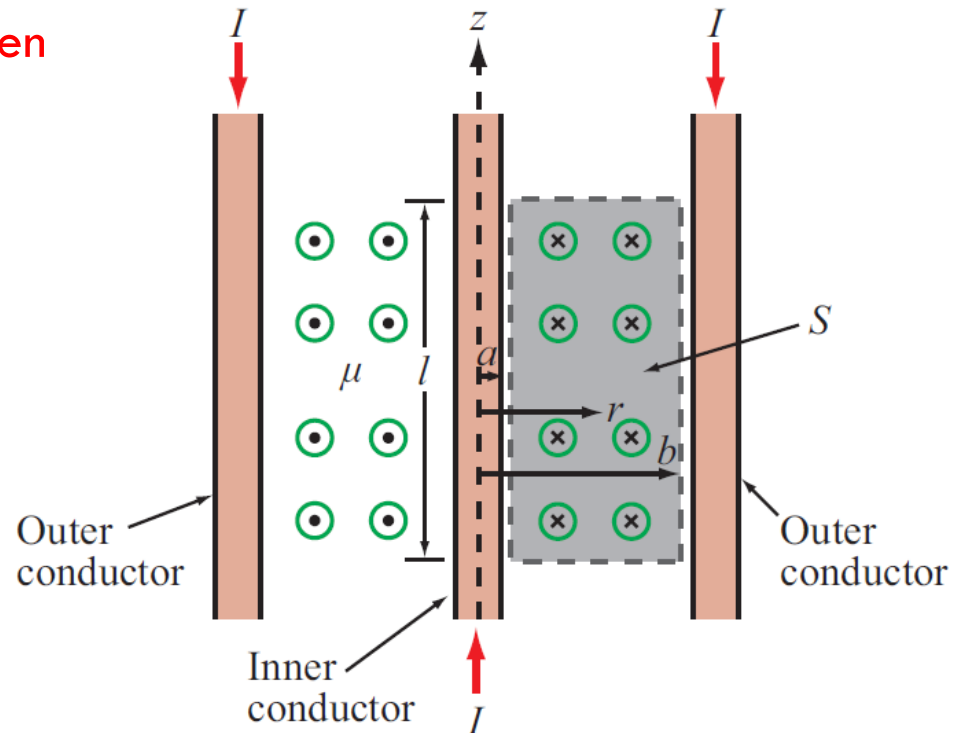


Figure 5-28: Cross-sectional view of coaxial transmission line (Example 5-7).

Tech Brief 11: Inductive Sensors

LVDT can measure displacement with submillimeter precision

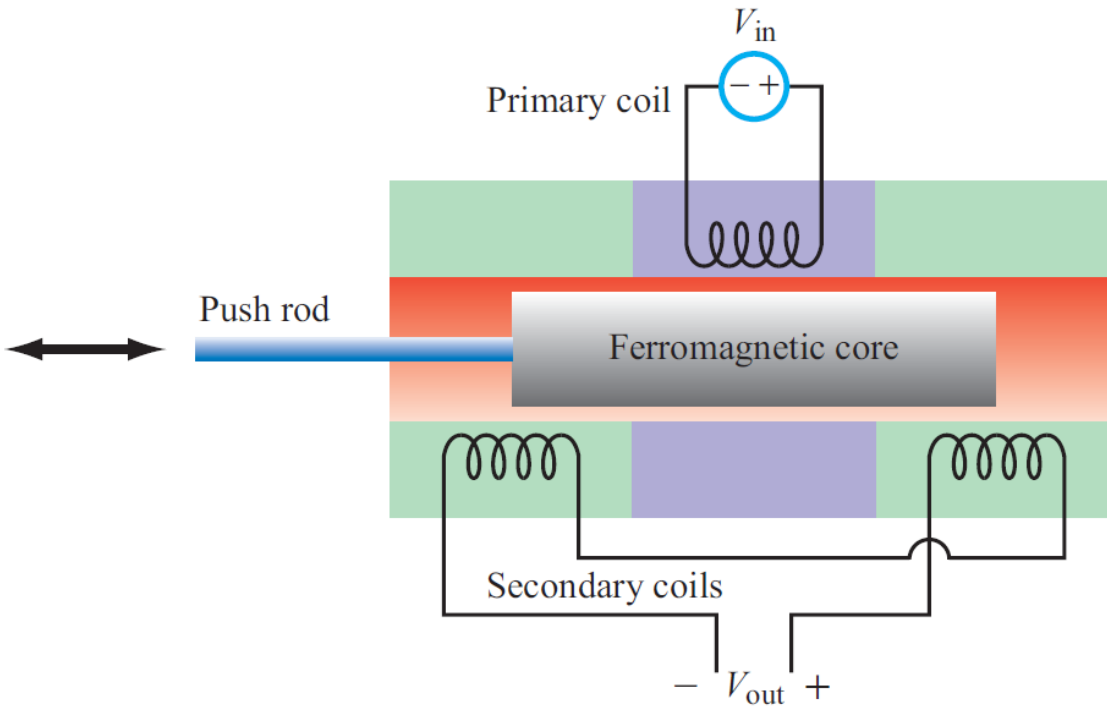


Figure TF11-1: Linear variable differential transformer (LVDT) circuit.

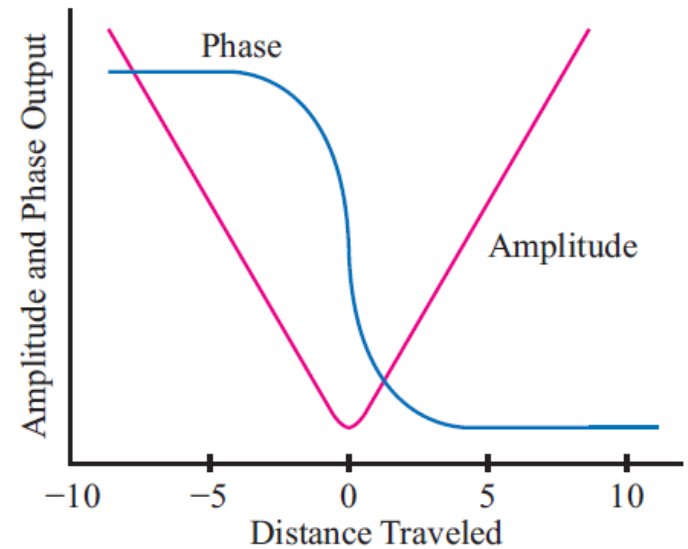


Figure TF11-2: Amplitude and phase responses as a function of the distance by which the magnetic core is moved away from the center position.

Proximity Sensor

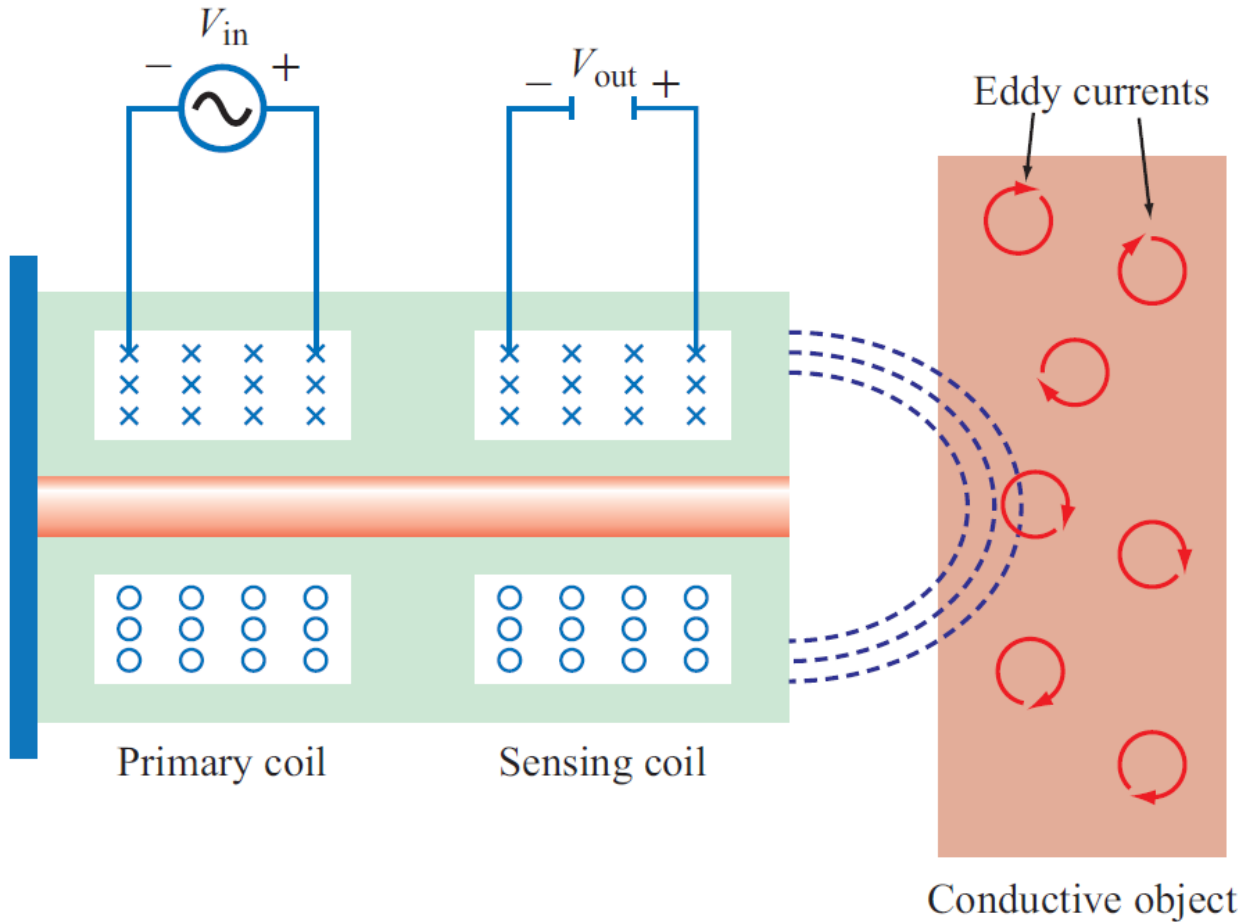


Figure TF11-5: Eddy-current proximity sensor.

Magnetic Energy Density

$$w_m = \frac{W_m}{V} = \frac{1}{2} \mu H^2 \quad (\text{J/m}^3).$$

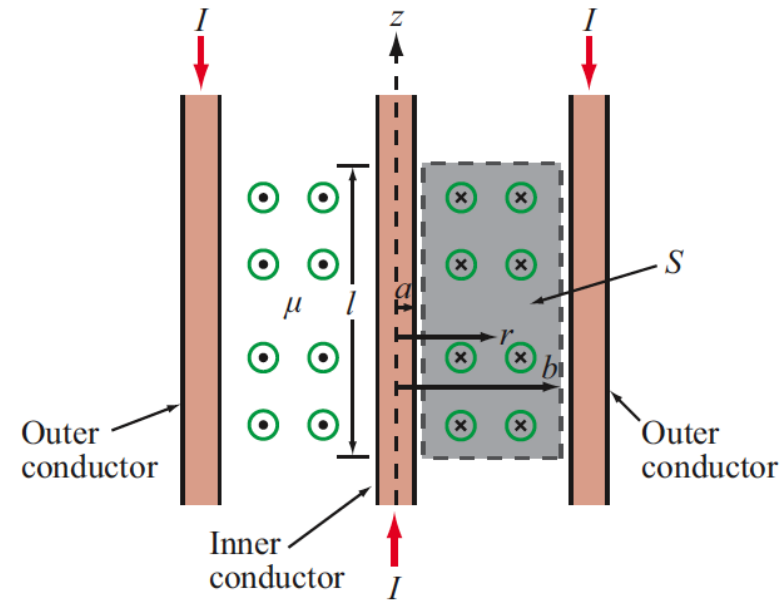
Example 5-8: Magnetic Energy in a Coaxial Cable

Magnetic field in the insulating material is

$$H = \frac{B}{\mu} = \frac{I}{2\pi r}$$

The magnetic energy stored in the coaxial cable is

$$W_m = \frac{1}{2} \int_V \mu H^2 dV = \frac{\mu I^2}{8\pi^2} \int_V \frac{1}{r^2} dV$$



$$\begin{aligned} W_m &= \frac{\mu I^2}{8\pi^2} \int_a^b \frac{1}{r^2} \cdot 2\pi r l dr \\ &= \frac{\mu I^2 l}{4\pi} \ln \left(\frac{b}{a} \right) \\ &= \frac{1}{2} L I^2 \quad (\text{J}), \end{aligned}$$

Summary

Chapter 5 Relationships

Maxwell's Magnetostatics Equations

Gauss's Law for Magnetism

$$\nabla \cdot \mathbf{B} = 0 \quad \longleftrightarrow \quad \oint_S \mathbf{B} \cdot d\mathbf{s} = 0$$

Ampère's Law

$$\nabla \times \mathbf{H} = \mathbf{J} \quad \longleftrightarrow \quad \oint_C \mathbf{H} \cdot d\boldsymbol{\ell} = I$$

Lorentz Force on Charge q

$$\mathbf{F} = q(\mathbf{E} + \mathbf{u} \times \mathbf{B})$$

Magnetic Force on Wire

$$\mathbf{F}_m = I \oint_C d\boldsymbol{\ell} \times \mathbf{B} \quad (\text{N})$$

Magnetic Torque on Loop

$$\mathbf{T} = \mathbf{m} \times \mathbf{B} \quad (\text{N}\cdot\text{m})$$

$$\mathbf{m} = \hat{\mathbf{n}} N I A \quad (\text{A}\cdot\text{m}^2)$$

Biot-Savart Law

$$\mathbf{H} = \frac{I}{4\pi} \int_l \frac{d\boldsymbol{\ell} \times \hat{\mathbf{R}}}{R^2} \quad (\text{A/m})$$

Magnetic Field

Infinitely Long Wire $\mathbf{B} = \hat{\boldsymbol{\phi}} \frac{\mu_0 I}{2\pi r} \quad (\text{Wb/m}^2)$

Circular Loop $\mathbf{H} = \hat{\mathbf{z}} \frac{I a^2}{2(a^2 + z^2)^{3/2}} \quad (\text{A/m})$

Solenoid $\mathbf{B} \simeq \hat{\mathbf{z}} \mu n I = \frac{\hat{\mathbf{z}} \mu N I}{l} \quad (\text{Wb/m}^2)$

Vector Magnetic Potential

$$\mathbf{B} = \nabla \times \mathbf{A} \quad (\text{Wb/m}^2)$$

Vector Poisson's Equation

$$\nabla^2 \mathbf{A} = -\mu \mathbf{J}$$

Inductance

$$L = \frac{\Lambda}{I} = \frac{\Phi}{I} = \frac{1}{I} \int_S \mathbf{B} \cdot d\mathbf{s} \quad (\text{H})$$

Magnetic Energy Density

$$w_m = \frac{1}{2} \mu H^2 \quad (\text{J/m}^3)$$